

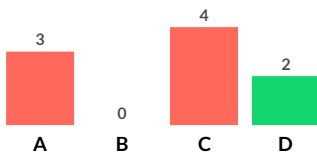
Q

Jan 30, 2018 matematička liga

Correct: 22%

6. Površina pravokutnog trokuta je 20, a jedna kateta 5. Kolika je druga kateta?

- A 25
- B 15
- C 4
- D 8

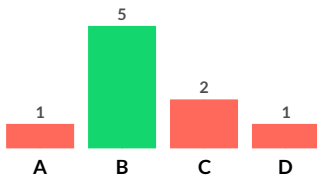


Jan 30, 2018 matematička liga

Correct: 56%

6. Ortocentar je središte trokutu upisane i opisane kružnice kod:

- A jednakokrakog trokuta
- B jednakostraničnog trokuta
- C raznostraničnog trokuta
- D ništa od navedenog

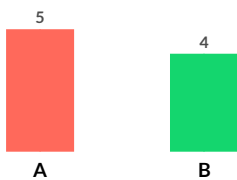


Jan 30, 2018 matematička liga

Correct: 44%

6. Trokut je određen s bilo koje tri točke

- A True
- B False

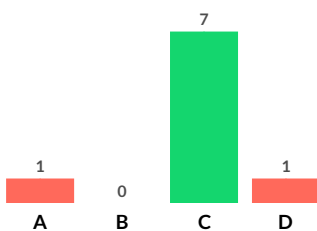


Jan 30, 2018 matematička liga

Correct: 78%

6. Kolika je površina trokuta ako je: $b = 2.2$ cm, $v_b = 5$?

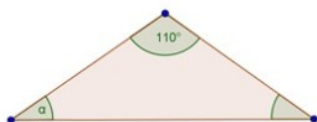
- A 11
- B 3,6
- C 5,5
- D 7,5



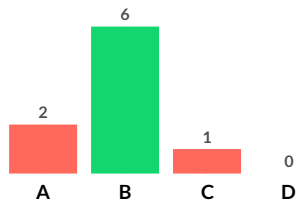
Jan 30, 2018 matematička liga

Correct: 67%

6. Koliki je označeni kut uz osnovicu jednakokračnog trokuta?



- A 70°
- B 35°
- C 110°
- D 45°

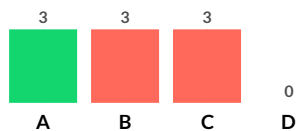


Jan 30, 2018 matematička liga

Correct: 33%

5. Koji se (isti) broj može upisati na crtice tako da istovremeno vrijede obje nejednakosti? $5 + _ < 15 - _ < + 13$

- A 3
- B 5
- C 6
- D 0

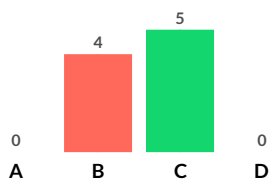


Jan 30, 2018 matematička liga

Correct: 56%

5. Koliko znamenki je potrebno za zapisivanje prvih 250 brojeva?

- A 250
- B 750
- C 558
- D 500

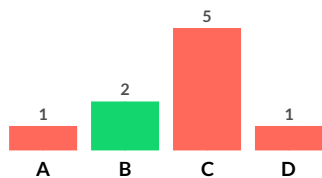


Jan 30, 2018 matematička liga

Correct: 22%

5. Koji broj treba pisati umjesto * da bi broj 9^*543^* bio djeljiv sa 9

- A 9
- B 3
- C 6
- D 2



Jan 30, 2018 matematička liga

Correct: 56%

5. Razlika $4\ 444 - 222$ djeljiva je s 4

- A True
- B False